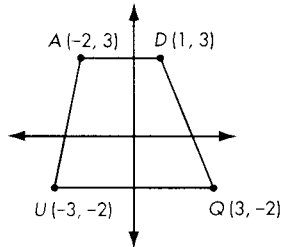


Name _____ Period _____ Date _____

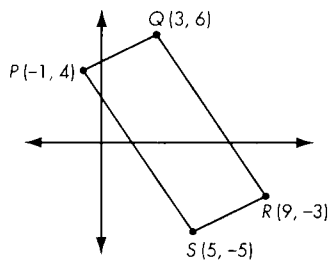
Lessons 4.4 and 4.5

In Exercises 1–10, determine whether each figure or set of coordinates forms a right triangle, a trapezoid, a parallelogram, a rectangle, or just an ordinary quadrilateral. Explain how you know.

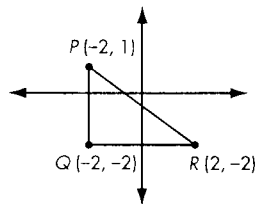
1.



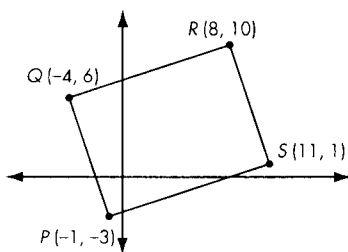
2.



3.



4.



5.

